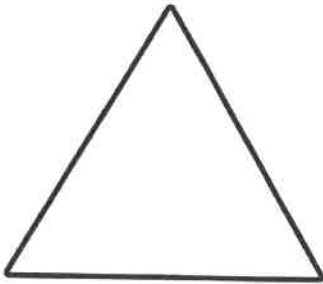


Properties of 2D Shapes


Write down the properties of the shapes.



A triangle has _____ sides.
A triangle has _____ corners.



A rectangle has _____ sides.
A rectangle has _____ corners.



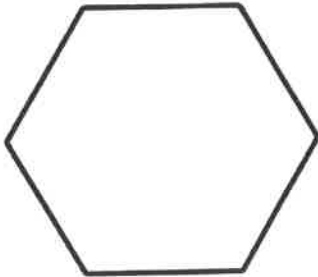
A square has _____ sides.
A square has _____ corners.



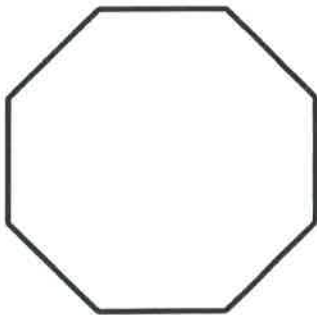
A quadrilateral has _____ sides.
A quadrilateral has _____ corners.

Properties of 2D Shapes

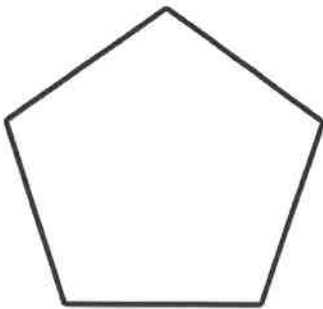
Write down the properties of the shapes.




A hexagon has _____ sides.
A hexagon has _____ corners.



A octagon has _____ sides.
A octagon has _____ corners.



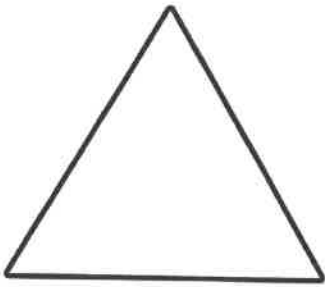
A pentagon has _____ sides.
A pentagon has _____ corners.



A circle has _____ sides.
A circle has _____ corners.

Properties of 2D Shapes


Write down the properties of the shapes.



What are the properties of a triangle?



What are the properties of a rectangle?



What are the properties of a square?

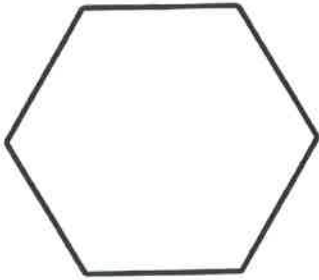


What are the properties of a quadrilateral?

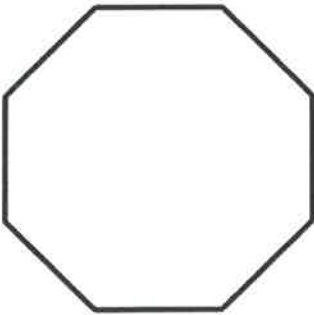
Purple penguins

Properties of 2D Shapes

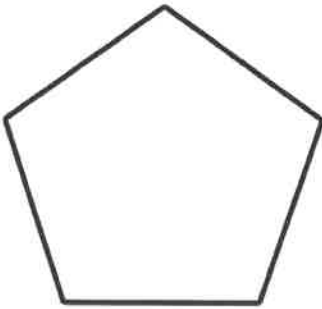
Write down the properties of the shapes.




What are the properties of a hexagon?



What are the properties of a octagon?



What are the properties of a pentagon?



What are the properties of a circle?
