
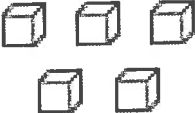

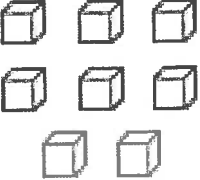


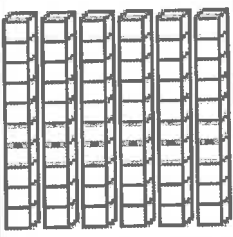
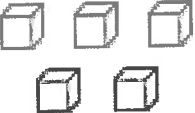
Red Robins

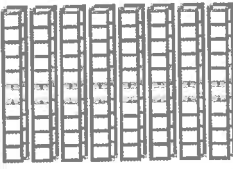
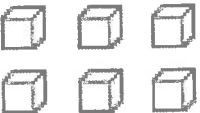
Monday 7th November 2022



This week's homework is numeracy and we have been focusing on place value. Can you have a go at writing the correct amount of tens and ones in the boxes below the pictures?



	
tens	ones

	
tens	ones

	
tens	ones

	
tens	ones

	
tens	ones

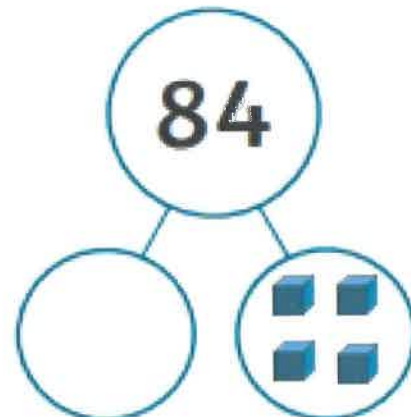
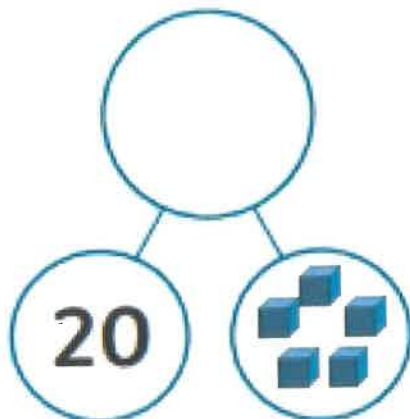
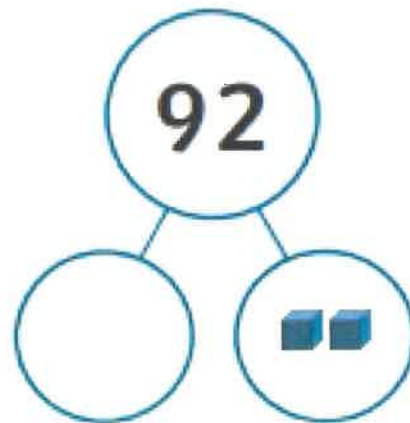
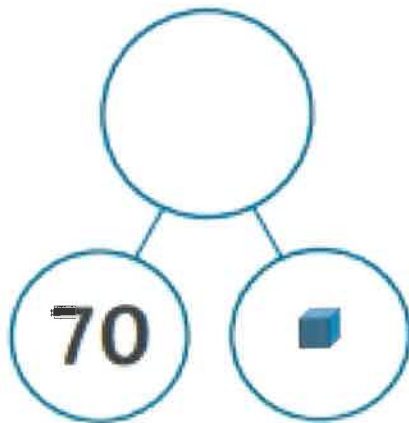
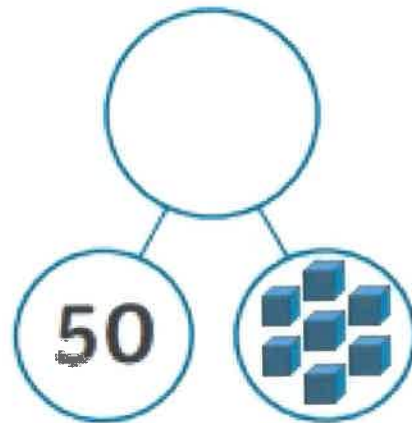
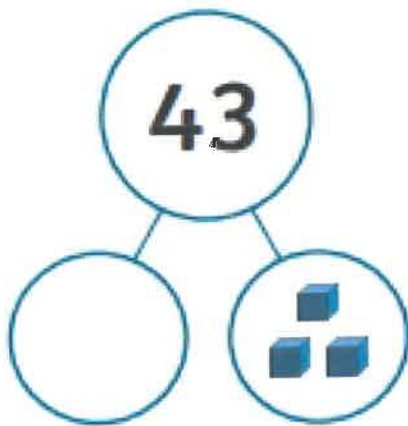
	
tens	ones

magenta monkeys

Monday 7th November 2022

This week's homework is numeracy and we have been focusing on place value. Can you have a go at completing the worksheet, think about what we looked at in class.

Complete the part-part-whole pictures by adding the missing number.



Turquoise Turtles

Monday 7th November 2022

This week's homework is numeracy and we have been focusing on place value. Can you have a go at partitioning the numbers into tens and ones. Think about what we did in class. I have done the first one to help you.

$$43 = 40 + 3$$

$$62 = \underline{\quad} + \underline{\quad}$$

$$37 = \underline{\quad} + \underline{\quad}$$

$$89 = \underline{\quad} + \underline{\quad}$$

$$28 = \underline{\quad} + \underline{\quad}$$

Purple penguins

Monday 7th November 2022

This week's homework is numeracy and we have been focusing on place value. Can you have a go at partitioning the numbers in two different ways. Think about what we did in class. I have done the first one to help you.

$$43 = 40 + 3$$

$$43 = 30 + 13$$

$$62 = \underline{\quad} + \underline{\quad}$$

$$62 = \underline{\quad} + \underline{\quad}$$

$$37 = \underline{\quad} + \underline{\quad}$$

$$37 = \underline{\quad} + \underline{\quad}$$

$$89 = \underline{\quad} + \underline{\quad}$$

$$89 = \underline{\quad} + \underline{\quad}$$