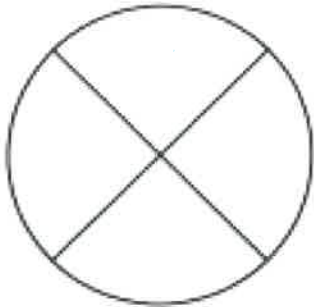


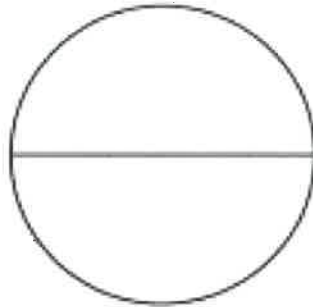
# Red Robins

Monday 28<sup>th</sup> November 2022

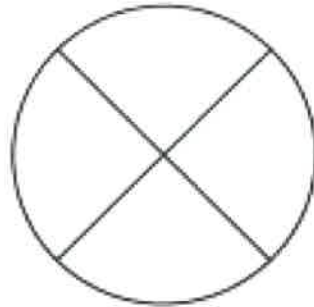
This week's homework is numeracy and we have been looking at fractions. Can you have a go at reading the fractions and colouring them in?



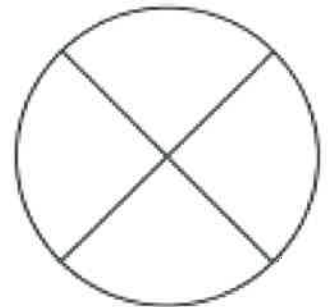
one quarter



one half



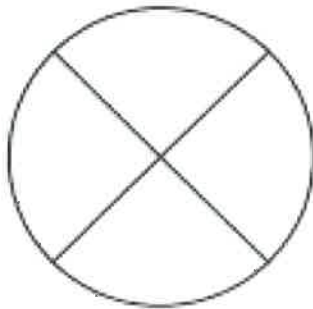
three quarters



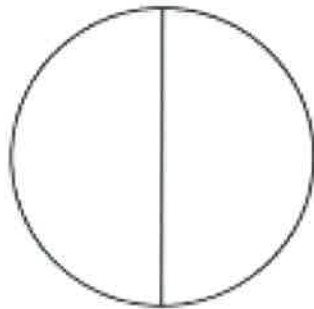
whole



one third



one quarter



whole

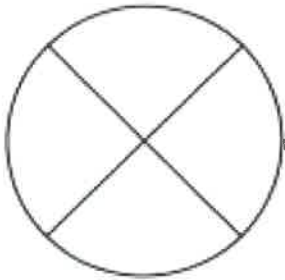


two thirds

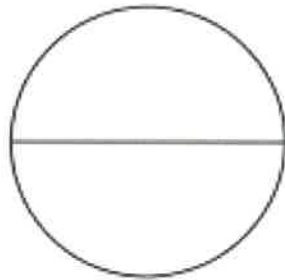
# Magenta monkeys

Monday 28<sup>th</sup> November 2022

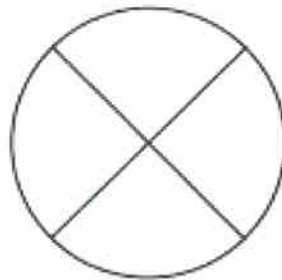
This week's homework is numeracy and we have been looking at fractions. Can you have a go at reading the fractions and colouring them in?



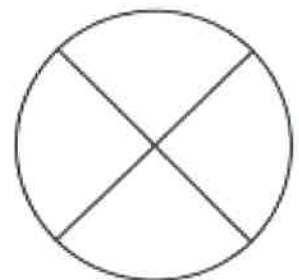
one quarter



one half



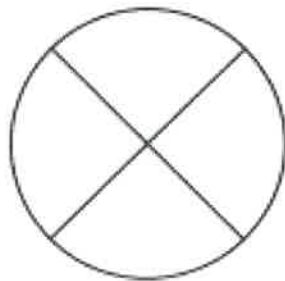
three quarters



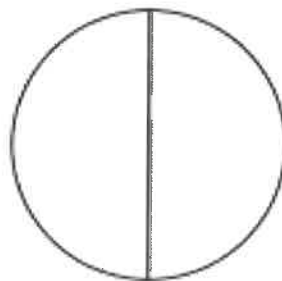
whole



one third



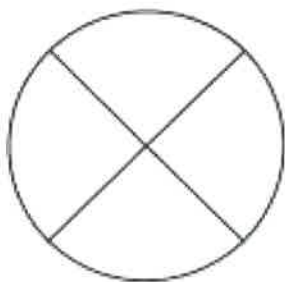
one quarter



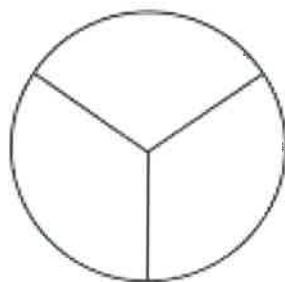
whole



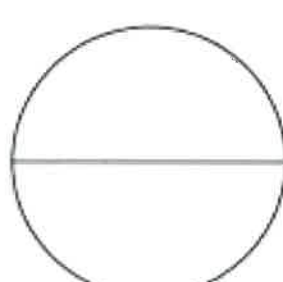
two thirds



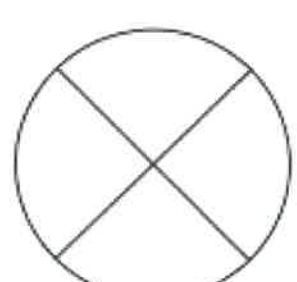
whole



one third



one half

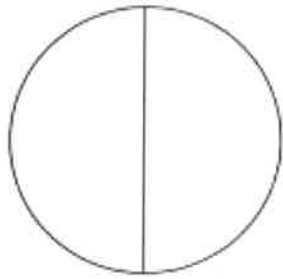


two quarters

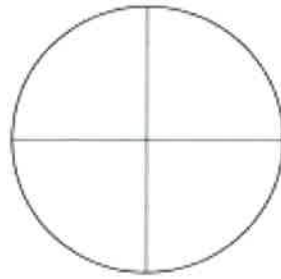
# Turquoise Turtles

Monday 28<sup>th</sup> November 2022

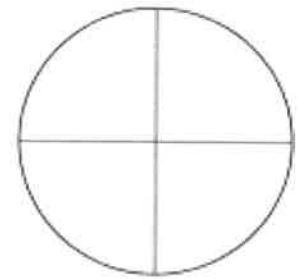
This week's homework is numeracy and we have been looking at fractions. Can you have a go at reading the fractions and colouring them in?



$\frac{1}{2}$



$\frac{1}{4}$



$\frac{3}{4}$



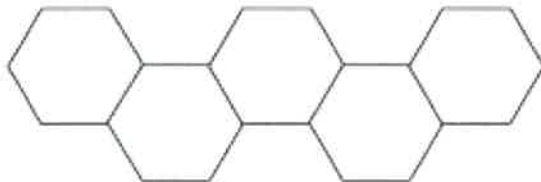
$\frac{1}{3}$



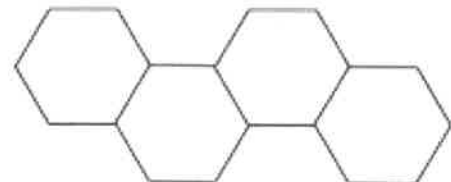
$\frac{3}{4}$



$\frac{1}{4}$



$\frac{1}{5}$

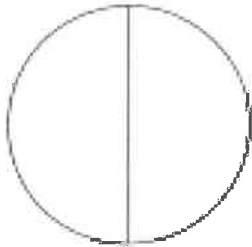


$\frac{2}{4}$

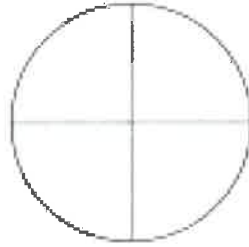
# Purple penguins

Monday 28<sup>th</sup> November 2022

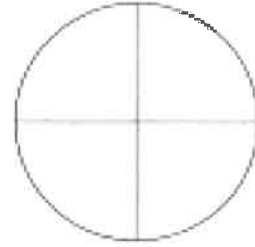
This week's homework is numeracy and we have been looking at fractions. Can you have a go at reading the fractions and colouring them in and then working out the fractions of amount. Remember to draw the circles to help you.



$\frac{1}{2}$



$\frac{1}{4}$



$\frac{3}{4}$



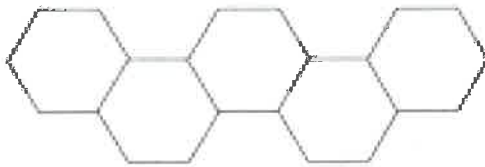
$\frac{1}{3}$



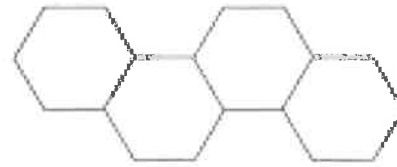
$\frac{3}{4}$



$\frac{1}{4}$



$\frac{1}{5}$



$\frac{2}{4}$

$\frac{1}{2}$  of 20 =

$\frac{1}{4}$  of 12 =

$\frac{2}{4}$  of 16 =