

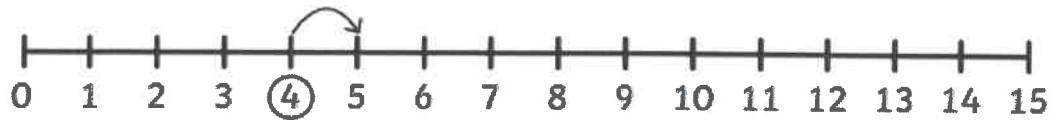
Red Robins.

Monday 16th January 2023

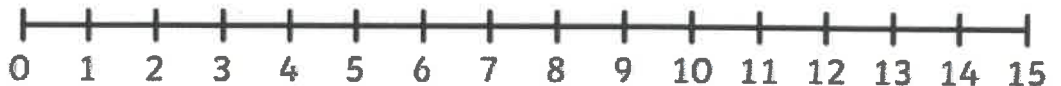
This week's homework is numeracy and in class we are looking at addition. We have been looking at using a number line to add two numbers together. Can you have a go at completing the worksheet, using the number lines to help you?

Example

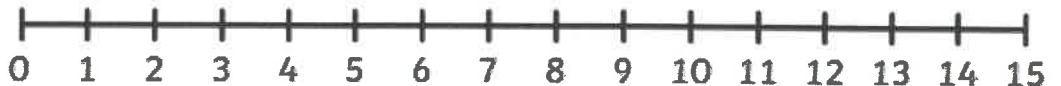
$4 + 1 = \boxed{5}$



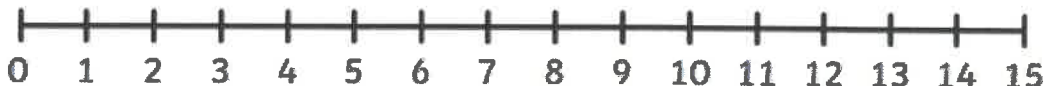
$5 + 3 = \boxed{}$



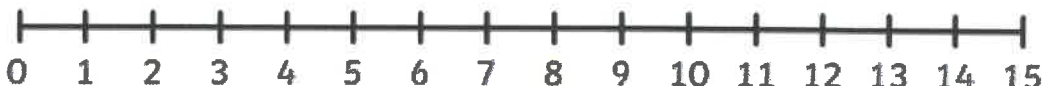
$8 + 3 = \boxed{}$



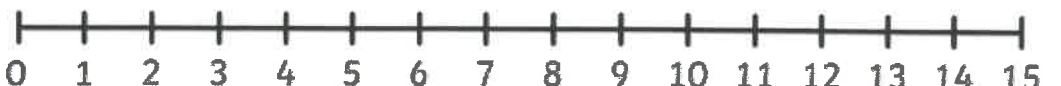
$6 + 6 = \boxed{}$



$4 + 5 = \boxed{}$



$4 + 7 = \boxed{}$





Magenta Monkeys.

Monday 16th January 2023

This week's homework is numeracy and in class we are looking at addition. We have been looking at using a number line to add two numbers together. Can you have a go at completing the worksheet, using the number lines to help you?

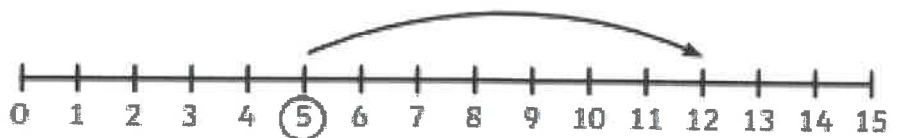
$$12 + 3 = \square$$


$$7 + 9 = \square$$


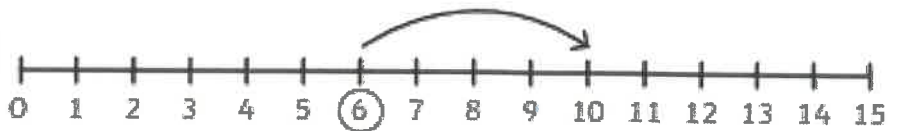
$$13 + 5 = \square$$


For this set of questions, can you have a go at working out the calculation, using the number line? Remember, when we add the biggest number must go at the end. The first one is done for you.

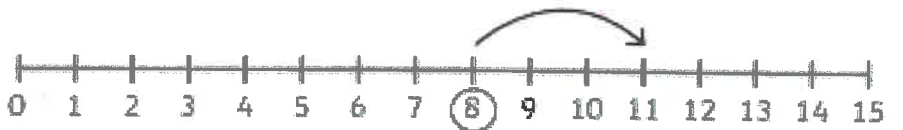
$$5 + 7 = 12$$



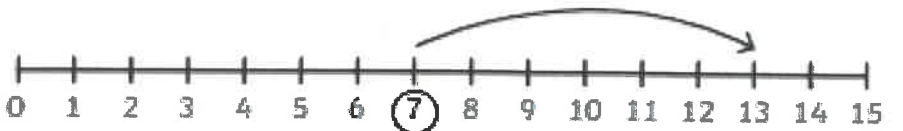
$$\square + \square = \square$$



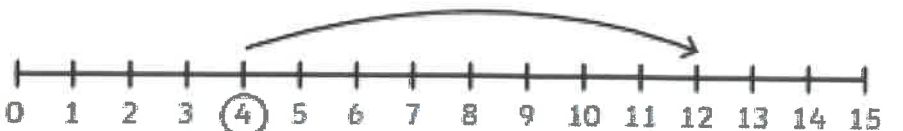
$$\square + \square = \square$$



$$\square + \square = \square$$



$$\square + \square = \square$$

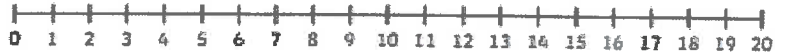


Turquoise

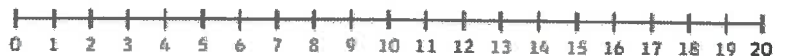
Monday 16th January 2023

This week's homework is numeracy and in class we are looking at addition. We have been looking at using number lines to add two and three numbers together, and using a written method to calculate two, two-digit numbers. Can you have a go at completing the calculations, you can use the number line given, or the written method we have looked at.

$$4 + 6 + 3 = \boxed{}$$



$$8 + 2 + 9 = \boxed{}$$



Can you have a go at using the written method we have practised to complete the addition calculations. Use the first one to help you.

Example

TO TO

$$15 + 32 = 47$$

$$10 + 30 = 40$$

$$5 + 2 = 7$$

$$12 + 24 =$$

$$16 + 52 =$$

Purple Penguins

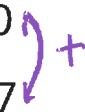
Monday 16th January 2023

This week's homework is numeracy and in class we are looking at addition. We have been looking at using number lines to add two and three numbers together, and using a written method to calculate two, two-digit numbers. Can you have a go at completing the calculations, using the written method. Use the example to help you, and don't forget to add your tens and one's hats!

Example

T O T O

$$T \quad 15 + 32 = 47 \quad \checkmark$$

$$O \quad 10 + 30 = 40$$
$$5 + 2 = 7$$


$33 + 24 =$

$62 + 23 =$

$26 + 52 =$

$82 + 31 =$

$45 + 16 =$

$51 + 26 =$