



Ladybird Doubles Plus One

How many spots are on the ladybird's back?


Use your doubles plus one knowledge to find out.




$1 + 2 = \underline{\quad}$




$2 + 3 = \underline{\quad}$



$3 + 4 = \underline{\quad}$



$4 + 5 = \underline{\quad}$




$5 + 6 = \underline{\quad}$

Superheroes


Dice Doubles Plus One

How many spots are on the dice?

Use your doubles plus one knowledge to find out.




+



$6 + 7 = \underline{\quad}$




+



$7 + 8 = \underline{\quad}$



+



$8 + 9 = \underline{\quad}$




+



$9 + 10 = \underline{\quad}$



+




$10 + 11 = \underline{\quad}$

Wizards


Butterfly Doubles Plus One

How many spots are on the butterfly's wings?

Use your doubles plus one knowledge to find out.



$1 + 2 = \underline{\quad}$



$2 + 3 = \underline{\quad}$



$3 + 4 = \underline{\quad}$



$4 + 5 = \underline{\quad}$




$5 + 6 = \underline{\quad}$

Pirates

Butterfly Doubles Plus One

How many spots are on the butterfly's wings?

Use your doubles plus one knowledge to find out.



$6 + 7 = \underline{\quad}$



$7 + 8 = \underline{\quad}$



$8 + 9 = \underline{\quad}$



$9 + 10 = \underline{\quad}$



$10 + 11 = \underline{\quad}$