


Red Robins

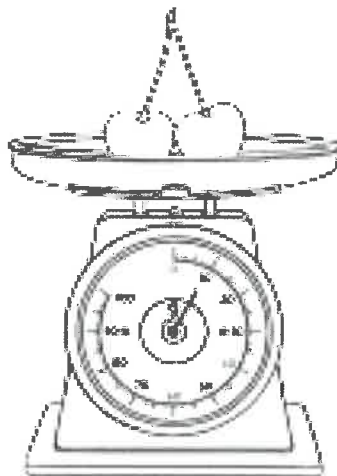
Monday 6th February 2023

This week's homework is numeracy and this week we are looking at measuring. We are looking at reading scales and measuring different objects using rulers. Can you have a go at reading the scales and writing in the measurement?

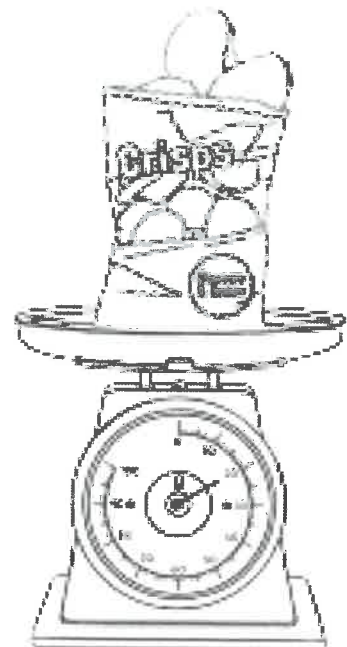
How Many Grams?



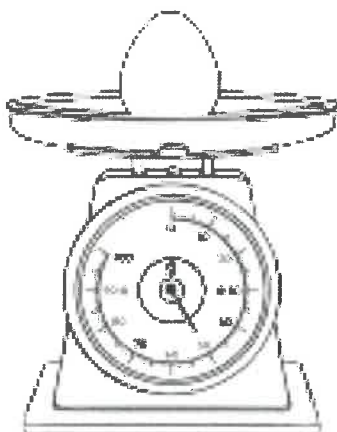
_____ g



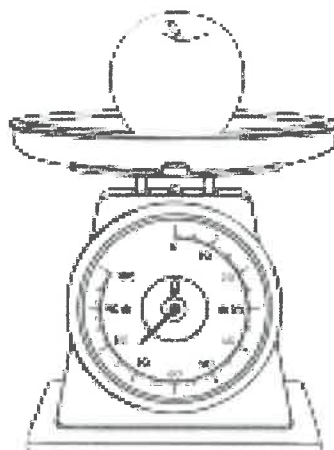
_____ g



_____ g



_____ g



_____ g




_____ g

Magenta Monkeys

Monday 6th February 2023

This week's homework is numeracy and this week we are looking at measuring. We are looking at reading scales and measuring different objects using rulers. Can you have a go at reading the scales and looking at the amount of water in each jug and writing the correct measurement down?

How Many Grams?



Measuring in ml

How much liquid is in each jug?



1. _____ ml

2. _____ ml

3. _____ ml

Turquoise Turtles


Monday 6th February 2023

This week's homework is numeracy and this week we are looking at measuring. We are looking at reading scales and measuring different objects using rulers. Can you have a go at writing in the correct measurements?

Write the temperature shown on each thermometer.





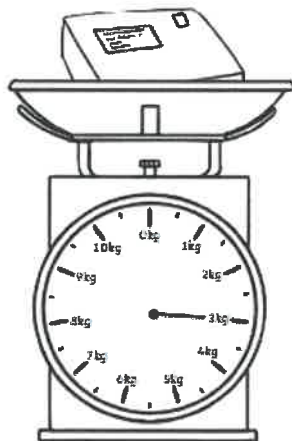


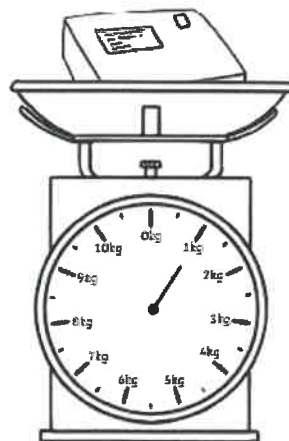


Write how much liquid is in each jug.









Purple penguins.

Monday 6th February 2023

This week's homework is numeracy and this week we are looking at measuring. We are looking at reading scales and measuring different objects using rulers. Can you have a go at writing in the correct measurements?

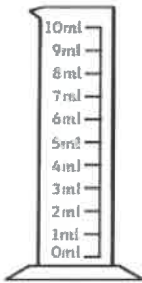


Ann measured the height of these 2 dolls in blocks.

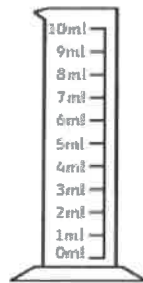
How many blocks taller is the large doll?

 blocks

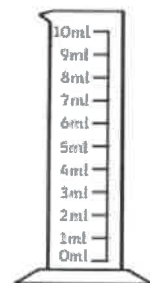
Can you colour in the jugs to show the correct measurements?



7ml

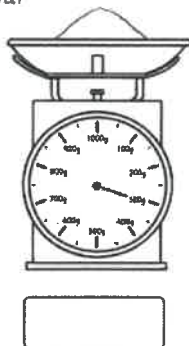


2ml

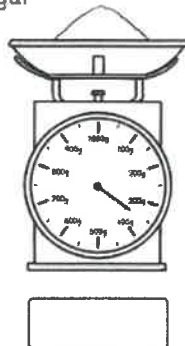


9ml

A. Flour



B. Sugar



C. Oats

