


# Red Robins.

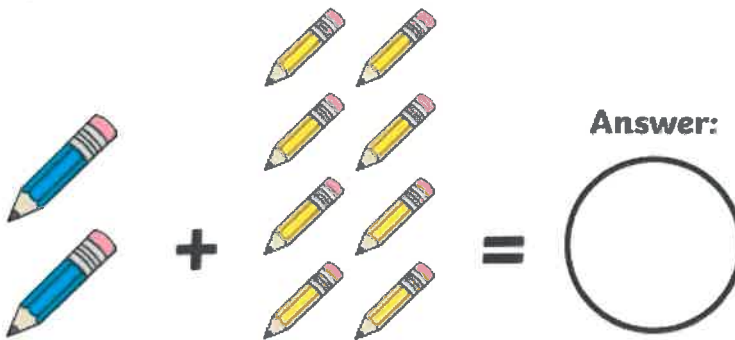
**Monday 6<sup>th</sup> March 2023**

This week's homework is numeracy and in class we are looking at solving word problems. Can you have a go at solving the addition and subtraction problems? Remember to read the question carefully and use the picture to help you.


There are 5 cars in the car park. 4 more cars park in the car park. How many cars are there altogether?



Sam has 2 old pencils. She gets 8 new pencils for her birthday. How many pencils does she have altogether?



There were 12 dogs at the park, 7 were taken home. How many dogs were left at the park?




# Magenta monkeys


Monday 6<sup>th</sup> March 2023

This week's homework is numeracy and in class we are looking at solving word problems. Can you have a go at solving the addition and subtraction problems? Remember to read the question carefully and use the picture to help you.

If you had 14 squares of chocolate and 5 chocolate fingers, how many do you have in total?



Answer:




If you had 8 milk cartons and 9 juice cartons, how many would you have altogether?



Answer:



Maria has 13 strawberries in a bowl, she then eats 7. How many does she have left?



Answer:



# Turquoise Turtles

Monday 6<sup>th</sup> March 2023

This week's homework is numeracy and in class we are looking at solving word problems. Can you have a go at solving the addition and subtraction problems? Remember to read the question carefully. You can use the squared paper on the next page to help you.

Sophie and Ted are collecting football stickers. Ted had 25 football stickers. Sophie has 36.

How many do they have in total?

How many more stickers does Sophie have than Ted?

Jafar was playing marbles. He started with 26 marbles. His friend gave him 12 more.

How many does he now have?

Jafar wants to play a game that needs 50 marbles, how many more does he need?

There were 32 dogs being walked at the park. 11 dogs went home with their owners and then another 15 went home later.

How many dogs are left at the park?

Corey has a bag of 40 lollies. One day he gives out 8 to his friends, the next day he gives out another 12.

How many does he have left?

# Purple penguins

**Monday 6<sup>th</sup> March 2023**

This week's homework is numeracy and in class we are looking at solving word problems. Can you have a go at solving the addition and subtraction problems? Remember to read the question carefully and you can use the squared paper on the next page to help you.

Sam is collecting cards.


He wants to collect **100** cards altogether.

Last week he collected **50** cards.

This week he collects **30** cards.



How many **more** cards does he need?

  
 cards

There are **11** boys and **16** girls in Blue Class.

(a) How many children are in Blue Class altogether?

  
 children

(b) There are **more** girls than boys.

How many more?