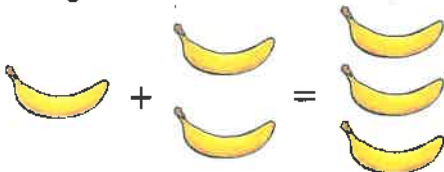


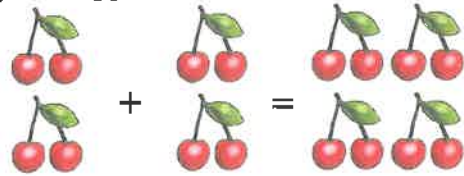
Adding



How It Works


When you add two numbers together you get a bigger number.



$$1 + 2 = 3$$



$$4 + 4 = 8$$


Now Try These


1. Count the objects and add them together.

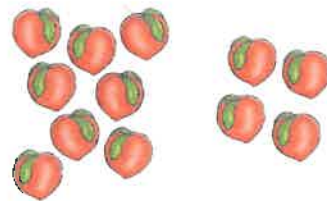

$$2 + 3 = \dots\dots\dots$$


$$1 + 5 = \dots\dots\dots$$



$$\dots\dots\dots + 6 = \dots\dots\dots$$


$$5 + \dots\dots\dots = \dots\dots\dots$$


$$\dots\dots\dots + \dots\dots\dots = \dots\dots\dots$$


$$\dots\dots\dots + \dots\dots\dots = \dots\dots\dots$$

2. Use the number lines to find the answers.



$4 + 5 = \dots\dots\dots$ | $7 + 0 = \dots\dots\dots$ | $6 + 2 = \dots\dots\dots$



$10 + 6 = \dots\dots\dots$ | $16 + 3 = \dots\dots\dots$ | $14 + 4 = \dots\dots\dots$

3. Anya has picked 5 raspberries. She picks 13 more raspberries.
How many raspberries does Anya have now?



raspberries

An Extra Challenge

Ted won 6 apples, 8 pears and 3 bananas at the fair.
How many pieces of fruit did he win in total?












How did it go?
Did it all add up for you?



Adding to 20


Write the numbers to make 20.



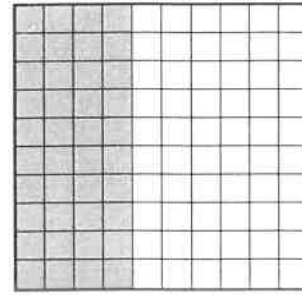
Name _____

Adding to 100


For each grid, write the numbers of squares that are shaded, and the numbers that are clear.




1. $\underline{\quad} + \underline{\quad} = 100$




2. $\underline{\quad} + \underline{\quad} = 100$




3. $\underline{\quad} + \underline{\quad} = 100$




4. $\underline{\quad} + \underline{\quad} = 100$




5. $\underline{\quad} + \underline{\quad} = 100$



6. $\underline{\quad} + \underline{\quad} = 100$



7. $\underline{\quad} + \underline{\quad} = 100$



8. $\underline{\quad} + \underline{\quad} = 100$