

Red Robins

Monday 15th May 2023

This week's homework is numeracy and we are focusing on position and direction in class. Can you have a go at completing the worksheet, focusing on prepositional language.

Matching Prepositions

Look at the prepositions and the pictures and match up the correct ones.

On



In




Under



Beside



In front of



Magenta Monkeys

Monday 15th May 2023

This week's homework is numeracy and we are focusing on position and direction in class. Can you have a go at completing the worksheet, focusing on prepositional language.


Matching Prepositions

Look at the prepositions and the pictures and match up the correct ones.

Behind



Between



Inside



Outside



Next to



Turquoise Turtles

Monday 15th May 2023

This week's homework is numeracy and we are focusing on position and direction in class. Can you have a go at completing the worksheet, focusing on prepositional language and describing a position.

above below

trianglesquare

The triangle is _____ the square.

The square is _____ the triangle.

Read the clues and draw the shapes.

Draw a circle to the left of the triangle.

Draw a square to the right of the triangle.

Draw a triangle above the rectangle.

Draw a circle below the rectangle.

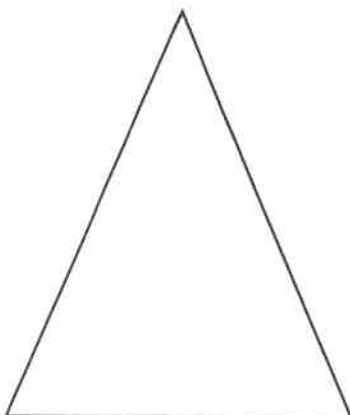
circle

square

triangle

rectangle

Can you draw the triangle, after it has completed a half turn?






Purple penguins.

Monday 15th May 2023

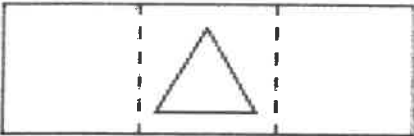





This week's homework is numeracy and we are focusing on position and direction in class. Can you have a go at completing the worksheet, focusing on prepositional language and describing a position.

Describe the position of each shape by adding in the correct word.

left ←	right →	 triangle	 circle	 square
The triangle is to the _____ of the circle.				
The square is to the _____ of the circle.				

The circle is to the _____ of the triangle.				
The circle is to the _____ of the square.				

Read the clues and draw the shapes.

	Draw a circle to the left of the triangle. Draw a square to the right of the triangle.		
	Draw a triangle above the rectangle. Draw a circle below the rectangle.		
 circle	 square	 triangle	 rectangle

Can you draw the triangle, after it has completed a quarter turn clockwise?

