

Red Robins

Monday 3rd July 2023

This week's homework is numeracy and we are focusing on consolidating our knowledge of what we have learnt so far. Can you have a go at completing the maths mat, by answering the questions on each different topic.

Section 7

Write down 2 facts about triangles.

.....

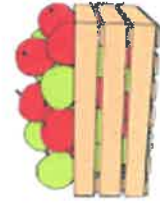
.....

.....

.....

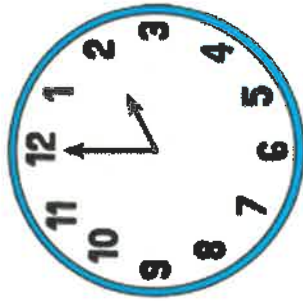
Section 8

There are 24 apples in a box. Half are sold. How many are left?



Section 5

What time is the clock showing?



Section 6

Write these numbers in words:

13

25

11

.....

.....

.....

Section 4

Make 17p using the fewest number of coins.



Section 1

Find the missing numbers:

$$15 + \square = 100$$

$$\square + 30 = 100$$

Section 2

What's my number?

I have 2 digits.

My tens digit = 30 - 10.

My ones digit is even, and is two less than 6.

Section 3

I have 18 toy cars. I share them between my 2 friends.

How many will they each have?



TURQUOISE TURTLES

Monday 3rd July 2023

This week's homework is numeracy and we are focusing on consolidating our knowledge of what we have learnt so far. Can you have a go at completing the maths mat, by answering the questions on each different topic.


Section 7
What do squares and rectangles have in common? Write two facts.

.....
.....
.....

Section 8
Egg boxes hold 6 eggs. I have 18 eggs.
How many boxes will I need?



Section 5
What time is the clock showing?



Section 6
Write these numbers in words.

211
401

Now write these words in numbers:

Nine hundred and four =
Two hundred and twenty-two =


Section 4
Make £4.63 using the fewest number of coins.



Section 1
Find the missing numbers:

$33 + 15 = 40 + \square$
 $\square + 16 = 23 + 12$

Section 2
What's my number?
I have 3 digits.
I am even.
My tens digit is half of 60.
My ones number is the same as 2 x 3.
My hundreds number is double 400.


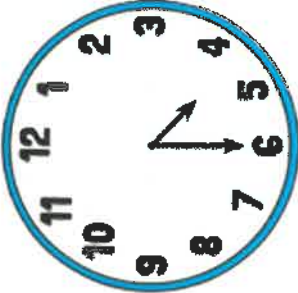




Section 3
I have 19 conkers. I share them between my 2 friends.
How many will they each have? How many will be left over?

Magenta monkeys

Monday 3rd July 2023

This week's homework is numeracy and we are focusing on consolidating our knowledge of what we have learnt so far. Can you have a go at completing the maths mat, by answering the questions on each different topic.

<p>Section 1 Find the missing numbers:</p> $75 + \boxed{} = 100$ $\boxed{} + 33 = 100$	<p>Section 4 Make £3.15 using the fewest number of coins.</p> 	<p>Section 5 What time is the clock showing?</p> 	<p>Section 7 Write down 2 facts about rectangles.</p> <p>.....</p> <p>.....</p> <p>.....</p> <p>.....</p>	<p>Section 8 I have 28 socks. How many pairs will I have?</p> 
<p>Section 2 What's my number? I have 2 digits. I am even. My tens digit is half of 40. My ones number is even and between 7 and 9.</p> <input type="text"/>	<p>Section 6 Write these numbers as words:</p> <p>441</p> <p>203</p> <p>117</p>	<p>Section 3 I have 62 football cards and I share them equally between my 2 friends. How many will they each have?</p> 	<input type="text"/>	

Purple penguins

Monday 3rd July 2023

This week's homework is numeracy and we are focusing on consolidating our knowledge of what we have learnt so far. Can you have a go at completing the maths mat, by answering the questions on each different topic.

Section 1

Use the correct sign < or > to make these true:

145		415
201		102

Section 2

What are the missing numbers?



75		65	60		45
----	--	----	----	--	----

Section 3

Zoe puts her zoo animals in twos. She has 14 pairs. How many animals are there altogether?



Section 4

Which number is the odd one out? Explain how you know.

107 204 113
91 115

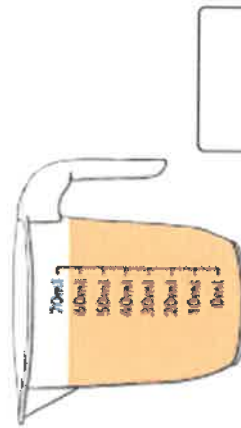


Section 6

Fran has 1 hour and 15 minutes until her dance exam. It is now 10am. What time will the exam start?

Section 7

If a 40ml glass of a juice is poured out, how much will be left in the jug?



Section 5

Mia eats one cake. Her sister eats one cake. What fraction of the cakes are left?



Section 8

Billy has 112 football cards. He has given 22 of them away. He thinks he should have 95 left. Is he correct? Explain how you know.



.....

.....