

Purple parrots.

Superhero Themed Rounding to 10

Round the numbers below to the nearest 10. The first one has been done for you.

52 → 50

55 → ____

68 → ____

41 → ____

25 → ____

91 → ____



39 → ____



54 → ____

16 → ____

27 → ____



89 → ____


94 → ____

52 → ____

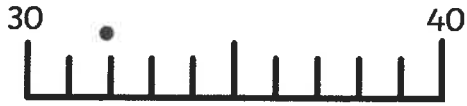
88 → ____

Rounding to the Nearest 10


Can you round these two-digit numbers to the nearest 10? Use the number lines to help you.




28 to the nearest 10 = 30



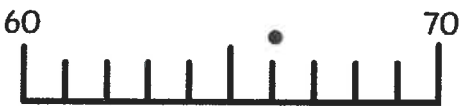
1. 32 to the nearest 10 = _____



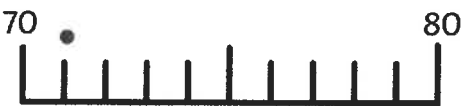
2. 46 to the nearest 10 = _____



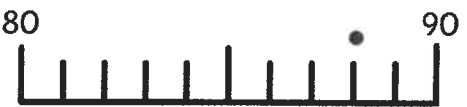
3. 54 to the nearest 10 = _____




4. 66 to the nearest 10 = _____




5. 71 to the nearest 10 = _____




6. 88 to the nearest 10 = _____



7. 93 to the nearest 10 = _____



8. 45 to the nearest 10 = _____



9. 44 to the nearest 10 = _____



10. 76 to the nearest 10 = _____

Space Themed Rounding to 10

Round the numbers below to the nearest 10. The first one has been done for you.

$243 \rightarrow \underline{240}$

$185 \rightarrow \underline{\quad}$

$297 \rightarrow \underline{\quad}$

$561 \rightarrow \underline{\quad}$

$188 \rightarrow \underline{\quad}$

$616 \rightarrow \underline{\quad}$

$765 \rightarrow \underline{\quad}$

$322 \rightarrow \underline{\quad}$

$625 \rightarrow \underline{\quad}$

$101 \rightarrow \underline{\quad}$

$147 \rightarrow \underline{\quad}$

$474 \rightarrow \underline{\quad}$

$911 \rightarrow \underline{\quad}$

$349 \rightarrow \underline{\quad}$

Brown Bears

Can you round these numbers to the nearest ten?

47 –

51 –

32 –

129 –

141 –

Can you round these numbers to the nearest hundred?

188 –

165 –

194 –

102 –