


Week 7 — Day 2

Write the numbers
in order. Start with
the smallest number.



1

4	2	9

5

8	6	7

2

3	1	7

6

3	5	2

3

5	6	1

7


9	8	1

4

5	2	4

8

6	5	9



Wizards

Today I scored out of 8.





Numbers 1 to 20

1. Draw lines to match each number to the correct word.
One has been done for you.



2. Write each number in words.

11


17

3. Fill in the missing numbers on these shirts.



Superheroes

Are you bouncing like a Reasoning Roo?





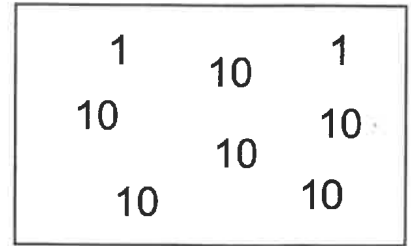
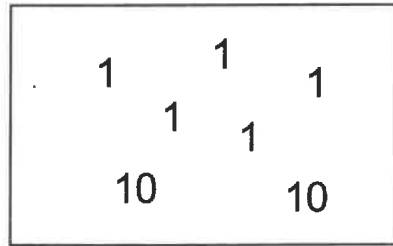
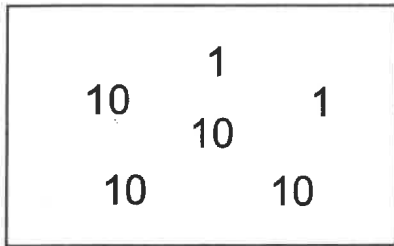
Place Value

1. Draw lines to match each number with the group of **tens** and **ones** it is made up of.



62

25

42



2. Jamal has 3 bags of carrots and 2 potatoes. Each bag has 10 carrots inside it.



How many vegetables does Jamal have in total?

vegetables

3. Circle the number that has **seven tens** and **eight ones**.

71

87

78

70

83


68

81

Pirates


Have you got the hang of place value?





Counting

1. How many **bats** and **balls** are there in the picture below?

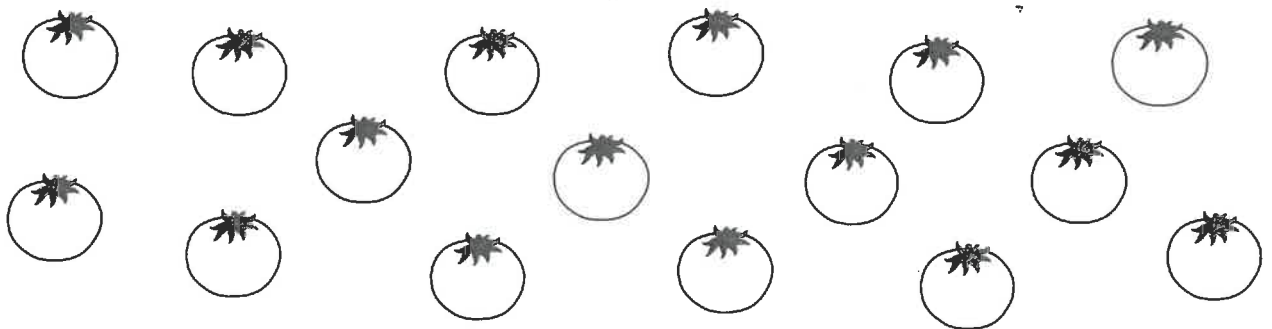


There are bats and balls

2. Fill in the missing numbers in the boxes.



3. Colour in 13 tomatoes.




4. Fill in the missing numbers.



Mermaids

Can you count like a Reasoning Roo?





Comparing Numbers

1. Circle the number that is **one less** than **91**.

18

89


81

92

90

2. Which number is **one more** than **49**?

Draw an arrow pointing to your answer on the fence below.



3. Draw lines to match each set of words with the correct football.



equal to
fifty-six

less than
twenty-four

more than
ninety

one more than
thirty-three

4. Here are three symbols.



Write the correct symbol in each box.

