


## Name the 2D Shape



---



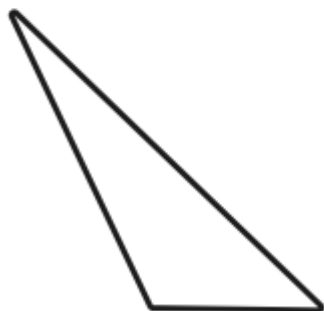
---



---



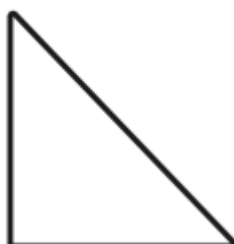
---



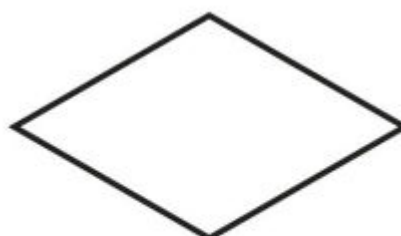
---



---

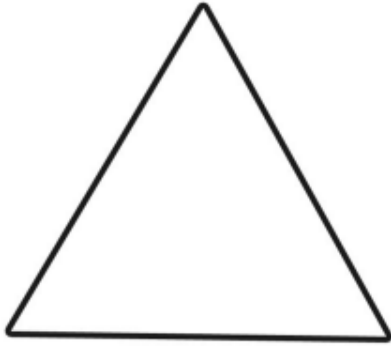


---



---

## Citrines



What are the properties of an equilateral triangle?

---

---

---




What are the properties of a rectangle?

---

---

---

---



What are the properties of a square?


---

---

---

---

# Emeralds



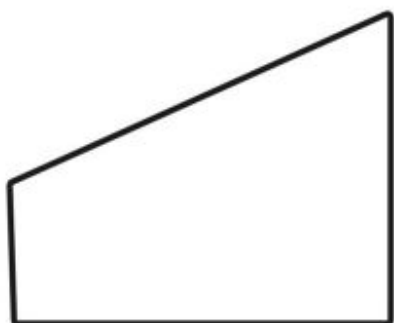
What are the properties of a square?

---

---

---

---



What are the properties of a quadrilateral?

---

---

---

---



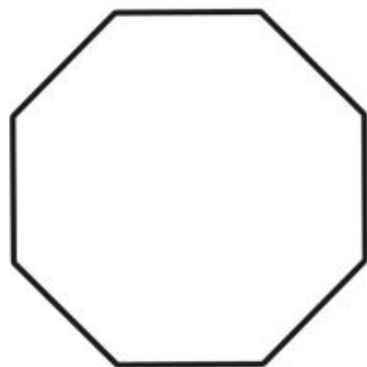
What are the properties of a parallelogram?

---

---

---

---



What are the properties of an octagon?

---

---

---

---

# Sapphires



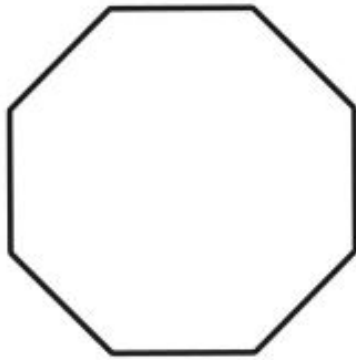
What are the properties of a parallelogram?

---

---

---

---



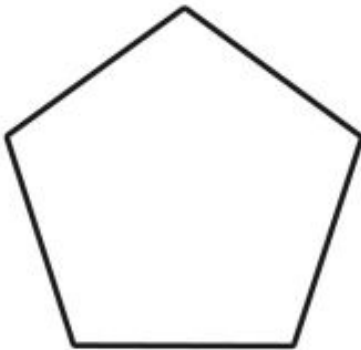
What are the properties of an octagon?

---

---

---

---



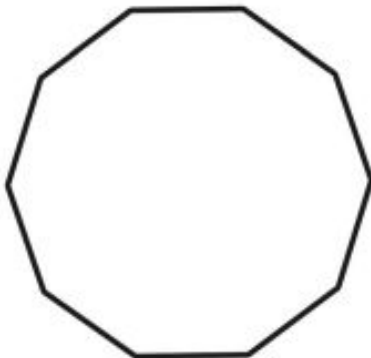
What are the properties of a pentagon?

---

---

---

---



What are the properties of a decagon?

---

---

---

---

# Amethysts

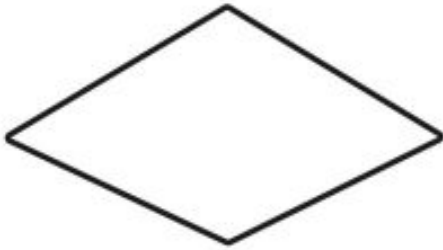


What are the properties of an isosceles triangle?

---

---

---



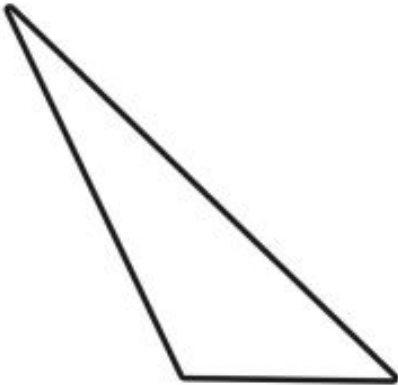
What are the properties of a rhombus?

---

---

---

---



What are the properties of a scalene triangle?

---

---

---



What are the properties of a trapezium?

---

---

---

---



What are the properties of a heptagon?

---

---

---

---