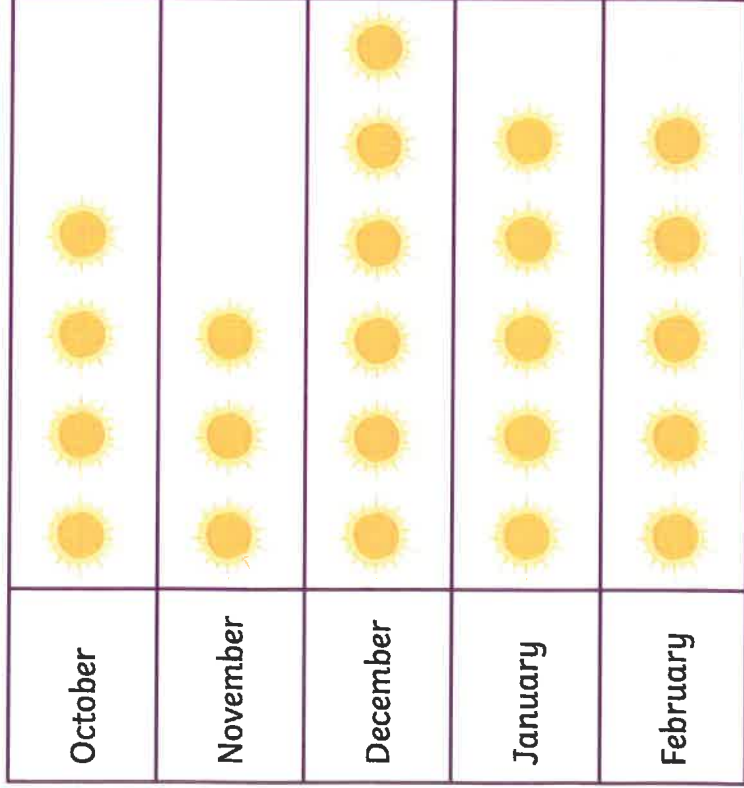


# Interpreting One-to-One Pictograms

To use a one-to-one pictogram to answer questions.

## Days of Sunshine Pictogram

 = 1 Day



How many days of sunshine did each month have?

October

January

November

February

December

Which month had the **most** sunny days?

Which month had the **least** sunny days?

Which months had the **same** number of sunny days?






Wizards

# Interpreting One-to-One Pictograms

To use a one-to-one pictogram to answer questions.

Days of Sunshine Pictogram

 = 1 Day

October	
November	
December	
January	
February	

Which month had the **most** sunny days?

Which 2 months had the **same** number of sunny days?

How many sunny days were there in December, January and February altogether?

How many more sunny days were there in December than November?

How many fewer sunny days were there in November than February?

November was the least sunny month. Do you agree? Explain why.

*Superheroes*

# Interpreting One-to-One Pictograms

To use a one-to-one pictogram to answer questions.

## Days of Sunshine Pictogram



= 1 Day

October	
November	
December	
January	
February	

Which months had **fewer** than 5 sunny days?

\_\_\_\_\_

What's the difference between the number of sunny days in December and November?

\_\_\_\_\_

How many sunny days were there in December, January and February altogether?

\_\_\_\_\_

Which had the most sunny days: **November and December together** or **January and February together**? Explain how you know.

\_\_\_\_\_


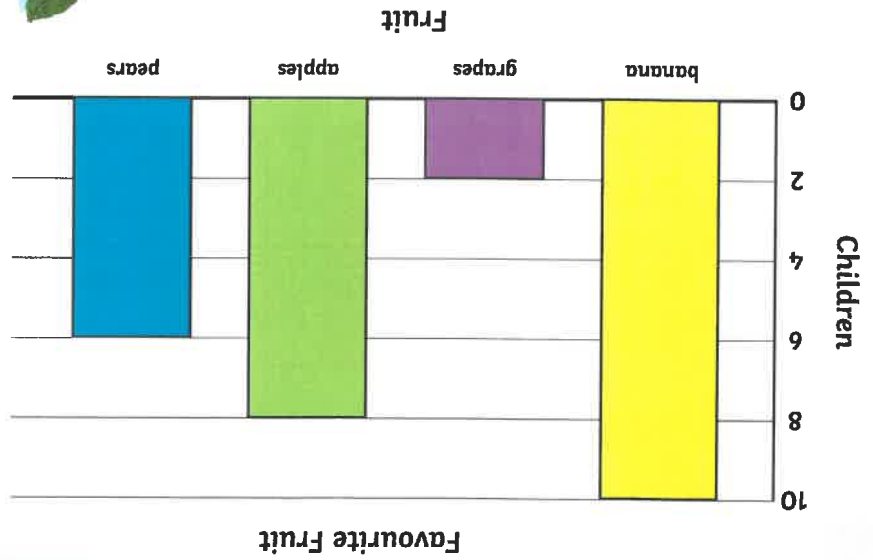
March had 10 days of sunshine. Explain how this would be shown on the pictogram.

\_\_\_\_\_

*Pirates*



# Interpreting Scaled Bar Charts



Answer the following questions.

- 1) What is the favourite fruit? \_\_\_\_\_
- 2) How many children chose apples as their favourite fruit? \_\_\_\_\_
- 3) How many more children chose bananas than grapes as their favourite fruit? \_\_\_\_\_
- 4) How many children in total chose apples or pears as their favourite fruit? \_\_\_\_\_

Write your own questions for a friend.

---



---



---



---



---

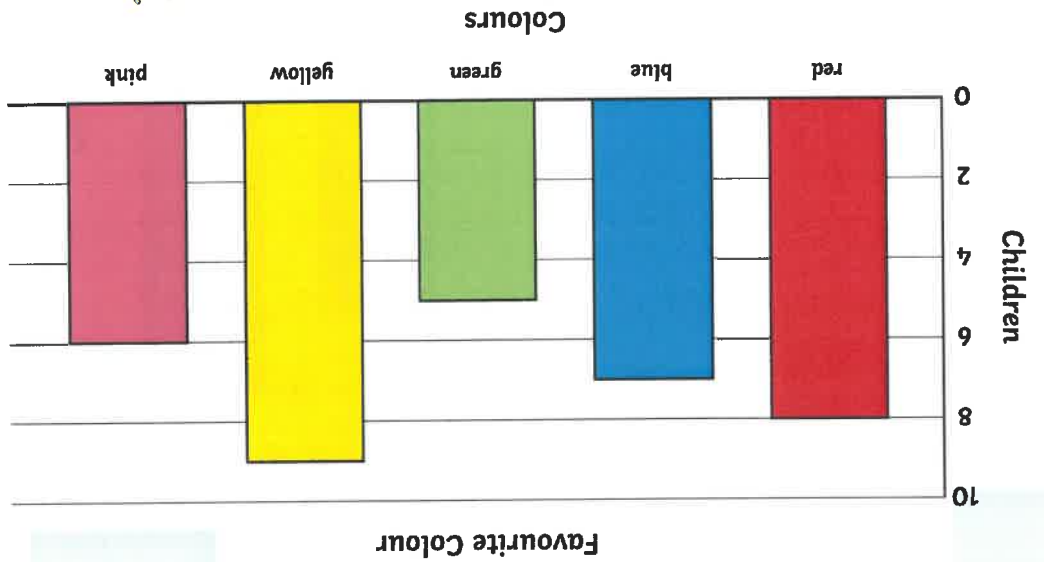


---

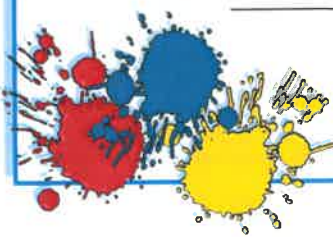
Mermaid



# Interpreting Scaled Bar Charts



Answer the following questions.



- 1) What is the least favourite colour? \_\_\_\_\_
- 2) How many children chose yellow as their favourite colour? \_\_\_\_\_
- 3) How many fewer children chose green than blue as their favourite colour? \_\_\_\_\_
- 4) How many children in total chose pink or red as their favourite colour? \_\_\_\_\_

Write your own questions for a friend.

---

---

---

---

---

---

knights



visit [twinkl.com](https://www.twinkl.com)

Page 2 to 3

