


Rocket Rounding to 10

I can round any whole number to the nearest 10.

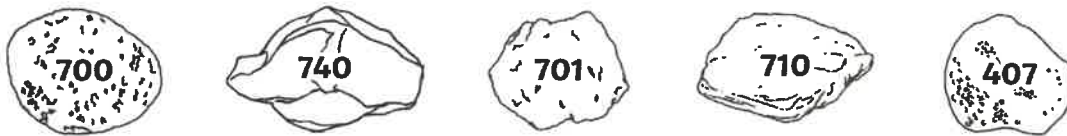
Can you help me collect some space rocks? Colour the correct rock to show your answers.



1) Round 537 to the nearest 10.



2) Round 704 to the nearest 10.




3) Which space rock will round to 670 when rounded to the nearest 10?



4) Round 345 to the nearest 10.



5) Which space rock will round to 220 when rounded to the nearest 10?



6) Round 843 to the nearest 10.



7) Which space rock will round to 600 when rounded to the nearest 10?



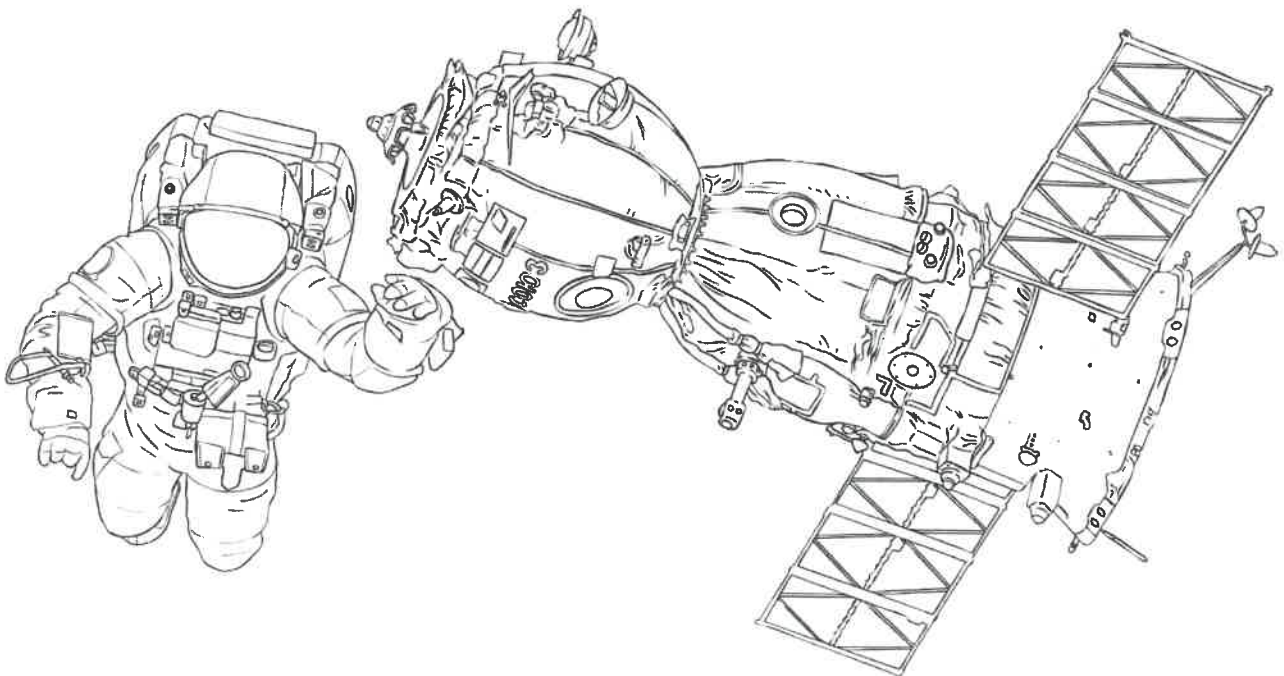
8) Round 934 to the nearest 10.



9) Round 294 to the nearest 10.




10) Which space rock will round to 870 when rounded to the nearest 10?



Rounding to the Nearest 100

Can you round these 3-digit numbers to the nearest 100? Use the number lines to help you.




280 to the nearest 100 = 300



1. 362 to the nearest 100 = _____



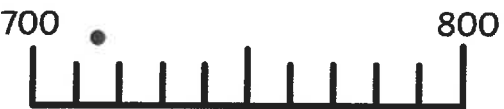
2. 565 to the nearest 100 = _____



3. 849 to the nearest 100 = _____



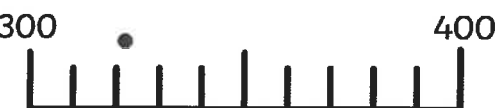
4. 623 to the nearest 100 = _____



5. 715 to the nearest 100 = _____



6. 890 to the nearest 100 = _____



7. 321 to the nearest 100 = _____



8. 245 to the nearest 100 = _____



9. 550 to the nearest 100 = _____



10. 376 to the nearest 100 = _____

Rounding to the Nearest 100

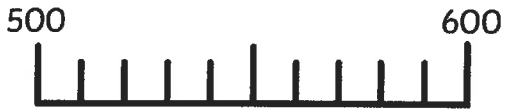
Can you round these 3-digit numbers to the nearest 100? Use the number lines to help you.



280 to the nearest 100 = 300



1. 362 to the nearest 100 = _____



2. 565 to the nearest 100 = _____



3. 849 to the nearest 100 = _____



4. 623 to the nearest 100 = _____



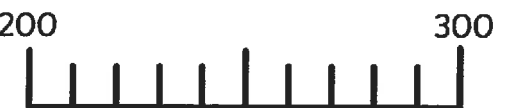
5. 715 to the nearest 100 = _____



6. 890 to the nearest 100 = _____



7. 321 to the nearest 100 = _____



8. 245 to the nearest 100 = _____



9. 550 to the nearest 100 = _____



10. 376 to the nearest 100 = _____