

3 Times Table Worksheet


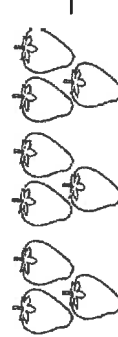
Work out these answers:



- a) $3 \times 4 =$ _____
- b) $3 \times 3 =$ _____
- c) $3 \times 5 =$ _____
- d) $3 \times 2 =$ _____
- e) $3 \times 9 =$ _____
- f) $3 \times 6 =$ _____
- g) $3 \times 7 =$ _____
- h) $3 \times 1 =$ _____
- i) $3 \times 11 =$ _____
- j) $3 \times 8 =$ _____
- k) $3 \times 10 =$ _____
- l) $3 \times 12 =$ _____

Count in 3s and colour in the grid:

1	2	3	4	5	6
7	8	9	10	11	12
13	14	15	16	17	18
19	20	21	22	23	24
25	26	27	28	29	30
31	32	33	34	35	36

How many pieces of fruit are there?

- a)  _____ \times _____ = _____
- b)  _____ \times _____ = _____

- c)  _____ \times _____ = _____
- d)  _____ \times _____ = _____

Golden Gorillas

3 times table

Name: _____

Exercise 1:

Draw a line connecting the multiplication expression with the correct product.

2×3	27	15
1×3	30	24
5×3	3	18
8×3	12	9
4×3	6	21
9×3		
3×3		
6×3		
7×3		
10×3		

Exercise 2:

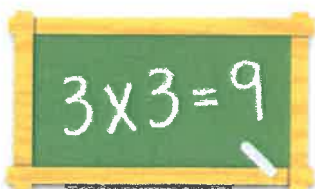
Fill in the missing number.

- a)  $\times 3 = 15$ b)  $\times 3 = 36$ c)  $\times 3 = 27$

Exercise 3:

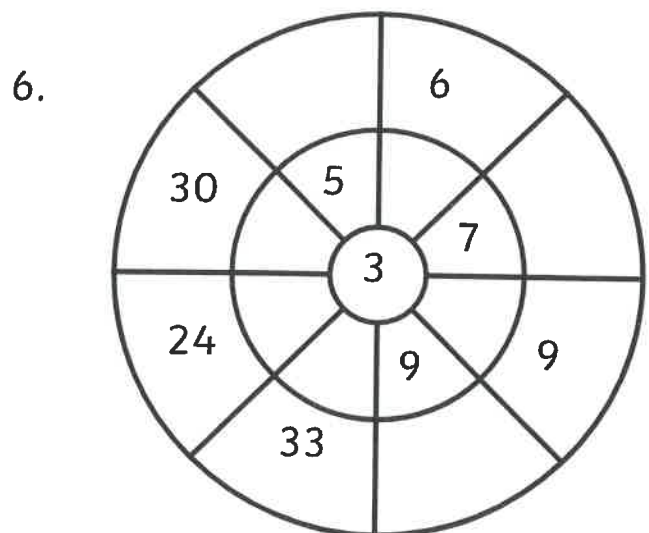
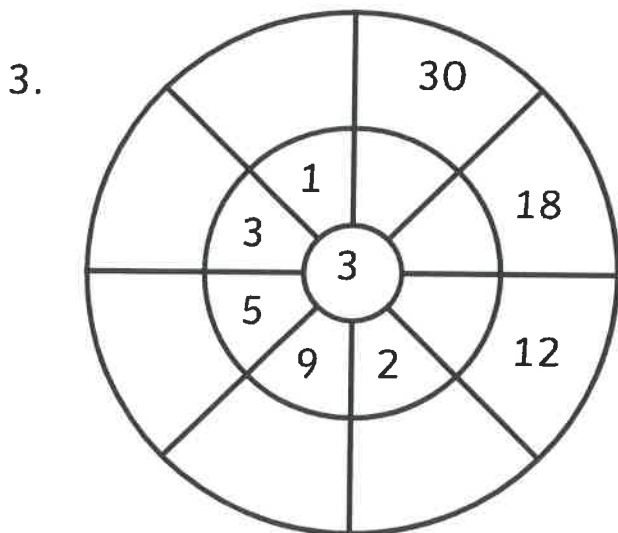
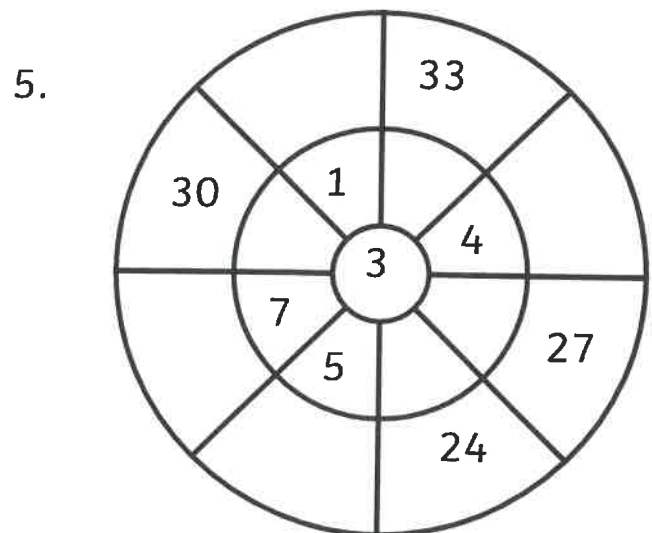
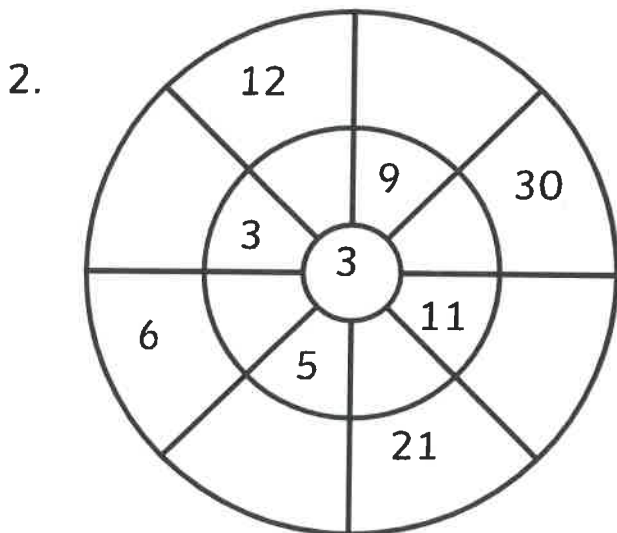
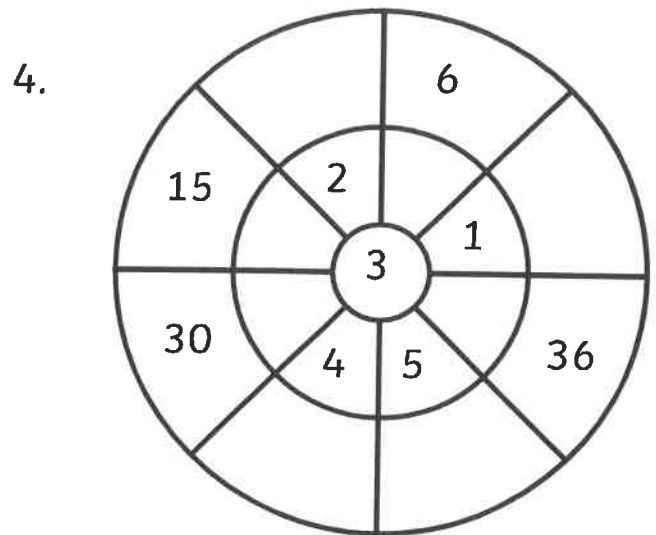
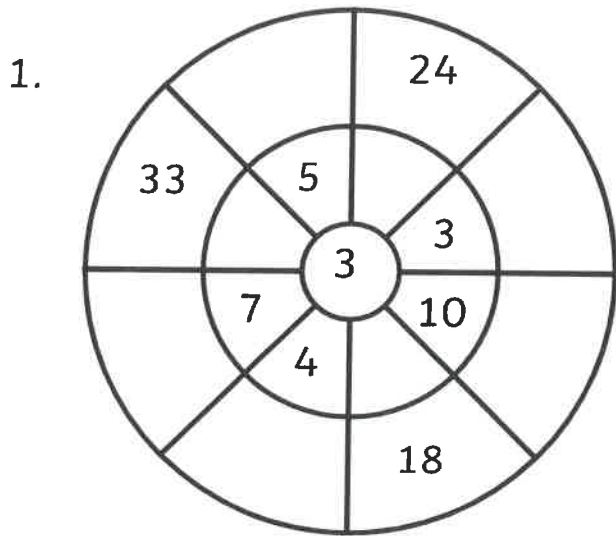
Fill in the correct product.

- a) $4 \times 3 = \underline{\quad}$ b) $1 \times 3 = \underline{\quad}$ c) $6 \times 3 = \underline{\quad}$
d) $5 \times 3 = \underline{\quad}$ e) $2 \times 3 = \underline{\quad}$ f) $7 \times 3 = \underline{\quad}$



For more worksheets, games and exercises:
www.timestables.co.uk

3 Times Table Multiplication Wheels



4 times table

Name: _____

Complete the circle by multiplying the number in the center by the middle ring to get the outer numbers.

