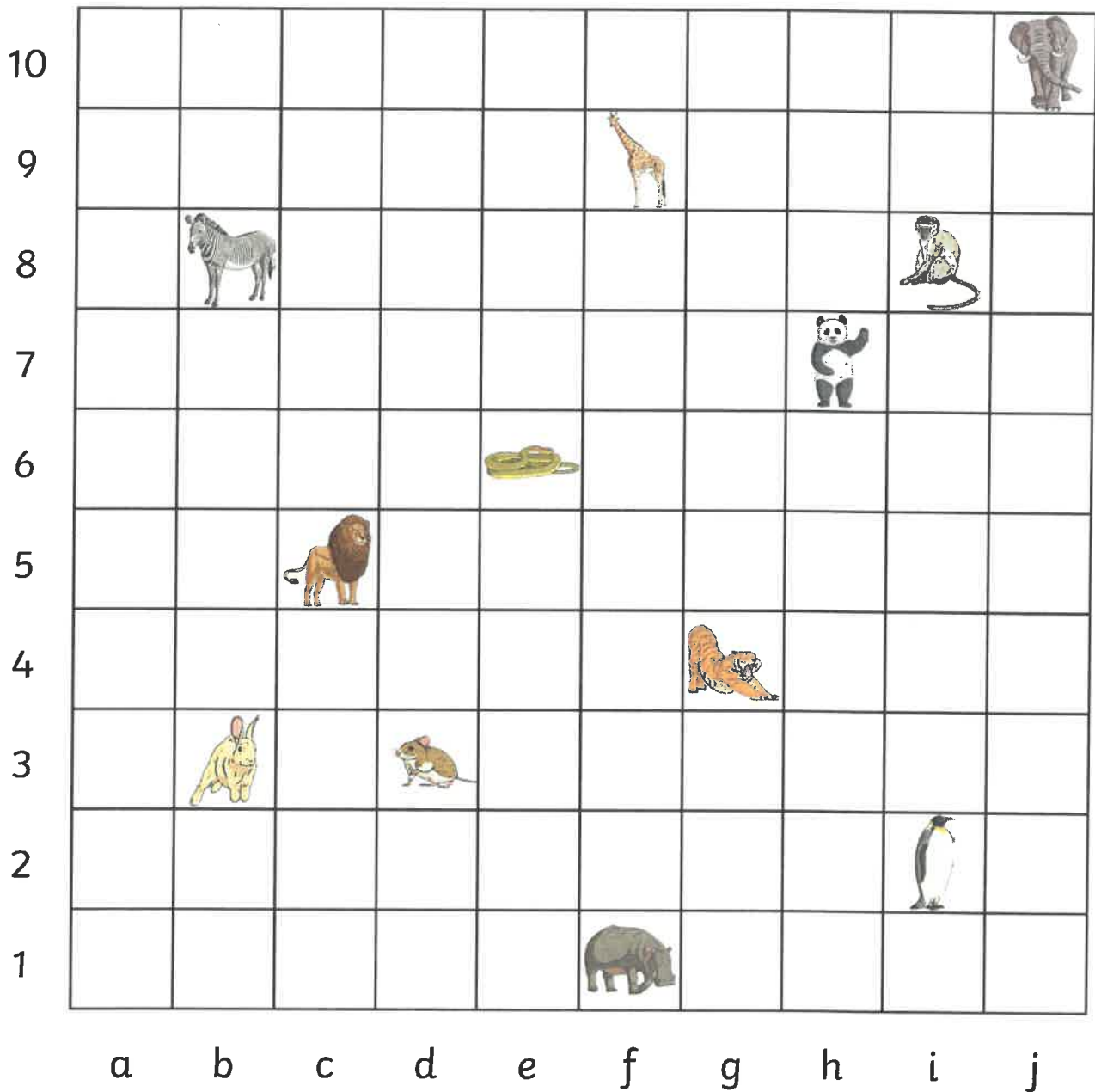


Moonstones

Animal Grid References



Write the coordinates of each animal.

Zebra _____	Panda _____	Giraffe _____
Mouse _____	Snake _____	Penguin _____
Tiger _____	Lion _____	Elephant _____
Hippo _____	Monkey _____	Rabbit _____

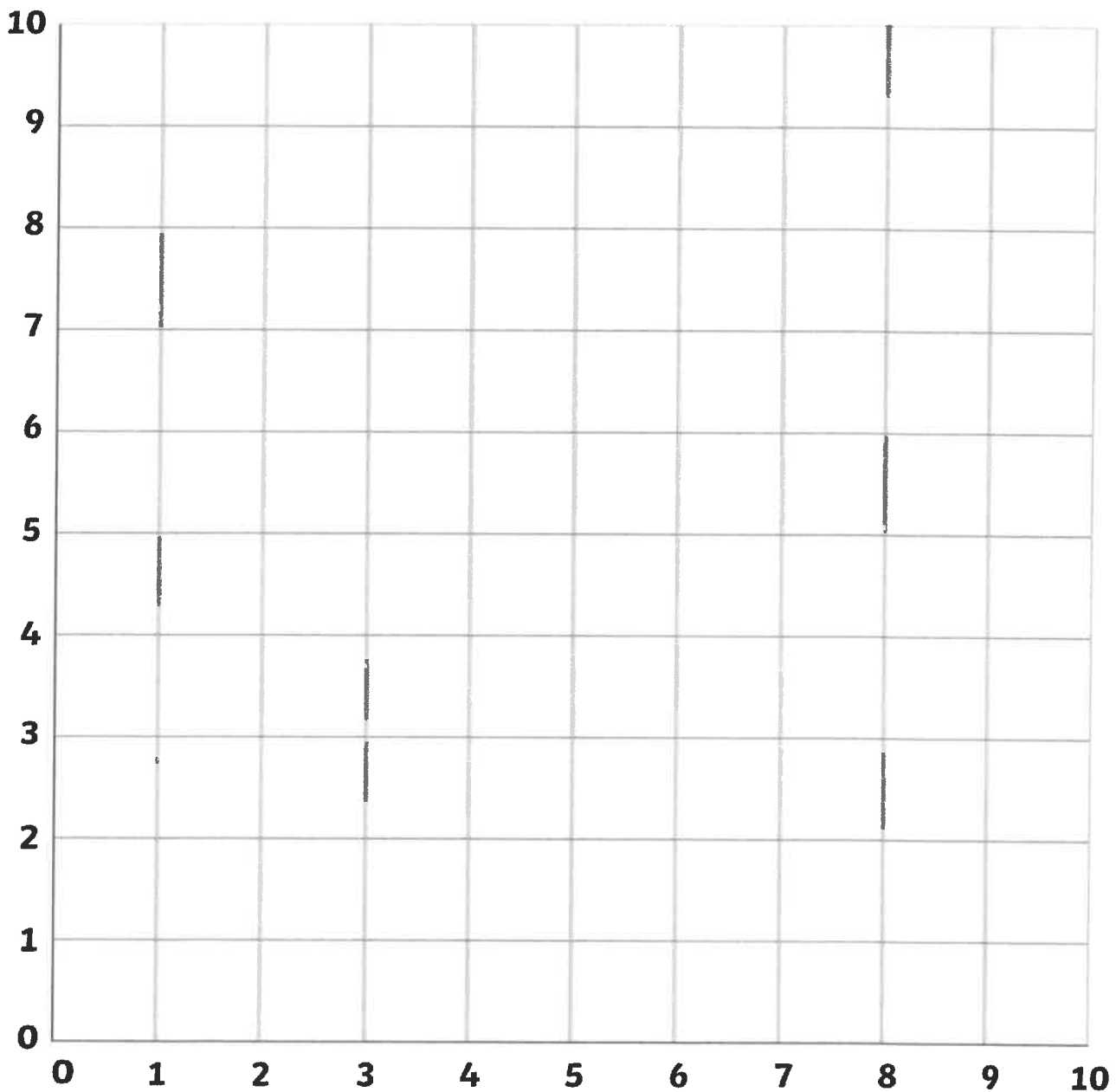
Emoji Coordinates *Citrines*

Draw the lines made by these coordinates. Use a different colour for each line.

(3,1) (0,4) (0,5) (1,6) (2,6) (3,5) (4,6) (5,6) (6,5) (6,4) (3,1)

(5,5) (2,8) (2,9) (3,10) (4,10) (5,9) (6,10) (7,10) (8,9) (8,8) (5,5)

What shape do they make together?



Emoji Coordinates *Emeralds*

Draw the lines made by these coordinates. Use a different colour for each line.

(6,0) (8,1) (9,2) (10,4) (10,6) (9,8) (8,9) (6,10) (4,10)

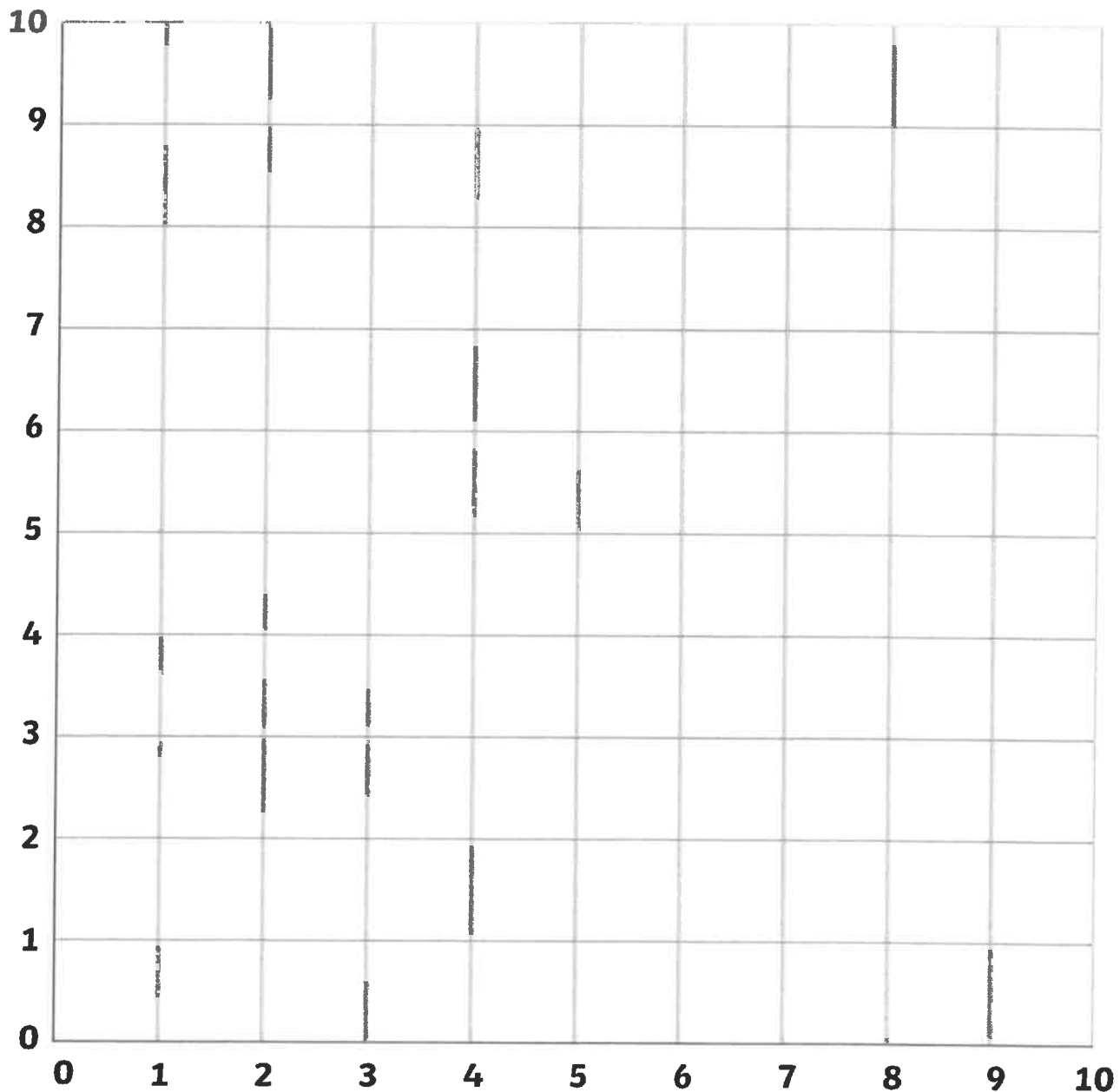
(6,0) (4,0) (2,1) (1,2) (0,4) (0,6) (1,8) (2,9) (4,10)

(3,5) (1,7) (2,8) (3,7) (4,8) (5,7) (3,5)

(7,5) (5,7) (6,8) (7,7) (8,8) (9,7) (7,5)

(3,4) (4,3) (6,3) (7,4) (6,2) (4,2) (3,4)

What shape do they make together?



Emoji Coordinates *Sapphires*

Draw the lines made by these coordinates. Use a different colour for each line.

(6,0) (8,1) (9,2) (10,4) (10,6) (9,8) (8,9) (6,10) (4,10)

(6,0) (4,0) (2,1) (1,2) (0,4) (0,6) (1,8) (2,9) (4,10)

(3,6) (4,7) (3,8) (2,7) (3,6)

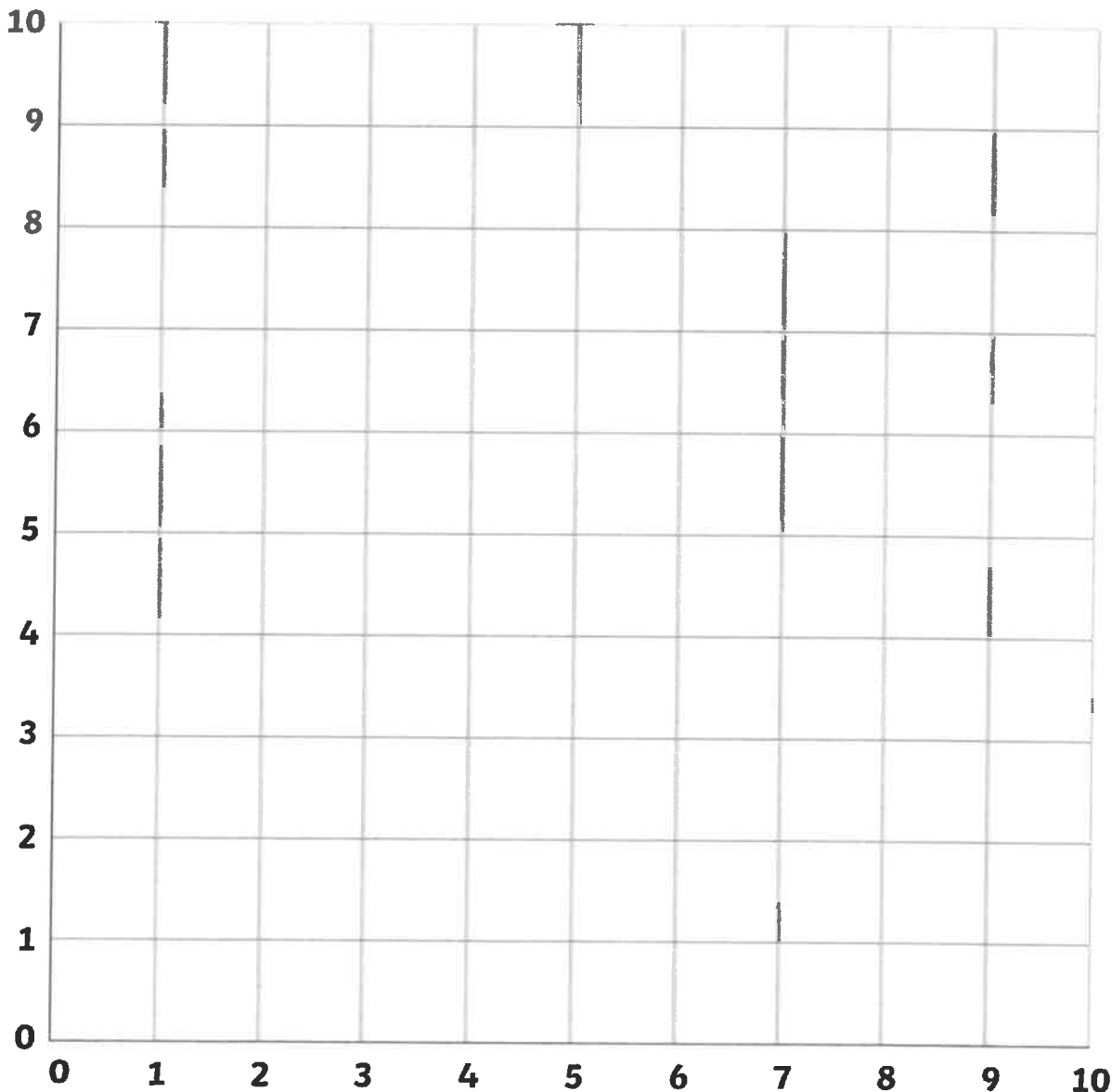
(1,7) (2,8) (4,9)

(6,9) (8,8) (9,7)

(6,7) (7,7) (8,6)

(3,4) (4,3) (6,3) (7,4) (6,2) (4,2) (3,4)

What shape do they make together?



Emoji Coordinates *Amethysts*

Draw the lines made by these coordinates. Use a different colour for each line.

(8,1) (7,0) (5,0) (3,1) (4,4) (2,3) (0,4) (0,5) (1,6) (3,7)

(3,7) (2,9) (4,8)

(7,4) (6,3) (6,2) (7,1) (9,1) (10,2) (9,2) (10,4) (10,5) (9,6) (9,4) (8,3) (7,4)

(9,6) (10,6) (9,7) (8,7) (7,8) (6,8) (6,9) (5,8) (5,9) (4,8)

(5,8) (6,7) (7,7) (6,6) (6,4) (7,5) (7,6) (8,7)

(7,5) (8,5) (7,4)

(4,6)

What shape do they make together?

