

Money to 10p

Look at the price tag on each item. Can you find the exact amount of money in and stick it under the item?

5p

7p

8p

3p

10p

Wizards

10p

10p

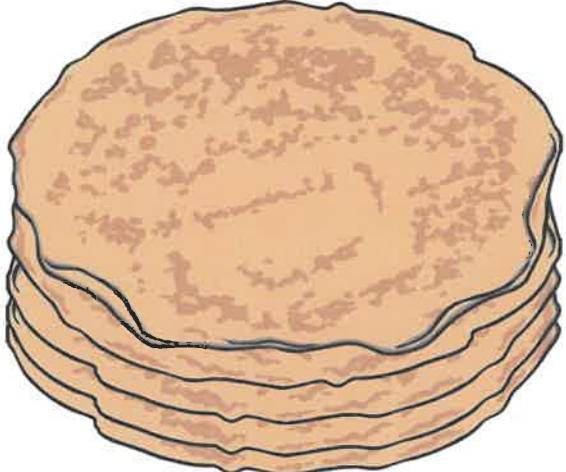
10p

10p


10p

How Much Do the Pancakes Cost?


How much does each pancake cost? Look at the coins and write the total amount in the circle.




Below the stack of pancakes are two coins: a silver ten pence coin and a silver five pence coin. To the right of the coins is an empty circle for writing the total cost.



Below the stack of pancakes are three coins: a silver ten pence coin, a silver five pence coin, and a brown two pence coin. To the right of the coins is an empty circle for writing the total cost.



Below the stack of pancakes are four coins: a silver ten pence coin, a brown two pence coin, a silver five pence coin, and a brown one pence coin. To the right of the coins is an empty circle for writing the total cost.



Below the stack of pancakes are two silver ten pence coins. To the right of the coins is an empty circle for writing the total cost.

Ordering Coins

Cut and paste the coins below and arrange them from smallest value to largest value in the boxes.

--	--	--	--	--	--	--

Smallest value

Largest value



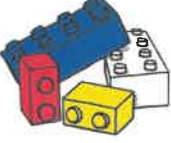
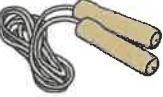






visit [twinkl.com](https://www.twinkl.com)



Shopping for Toys

Show which coins are needed to make the correct amounts. Draw or use real coins.

 <p>teddy 50p</p>	
 <p>ball 43p</p>	
 <p>block 80p</p>	
 <p>skipping rope 34p</p>	
 <p>car 22p</p>	
 <p>doll 99p</p>	
 <p>space rocket 66p</p>	
	

Counting Mixed Coins

Count the coins and write your answers in pence or pounds and pence.

1.



How much? _____

2.



How much? _____

3.



How much? _____

4.



How much? _____

5.



How much? _____

6.



How much? _____

7.



How much? _____

8.



How much? _____

9.



How much? _____

10.



How much? _____