





# Red Robins.

## Counting In 2s

Count in 2s to find out how many items there are in each row and write the answer in the circle.



# Magenta Monkeys

## Counting In 2s

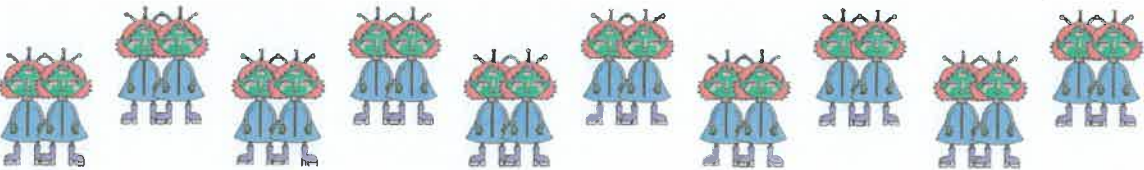
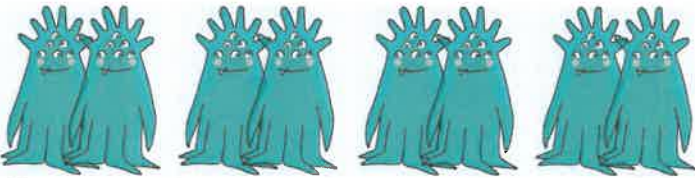

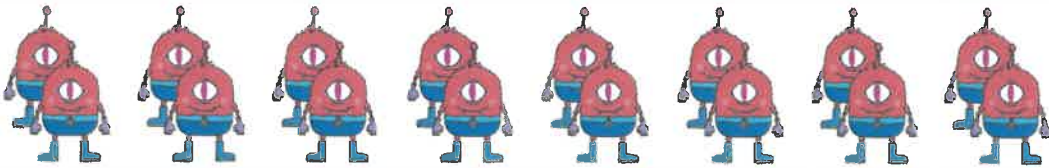
Count in 2s to find out how many items there are in each row and write the answer in the circle.



A vertical column of ten empty green circles, intended for writing the count for each row.

# Counting in 2s

Count in 2s to find out how many items there are in each row and write the answer in the circle.



# Turquoise Turtles

## Space Counting In 2s

Fill in the missing numbers. Use this number line to help you.



1.



4



6



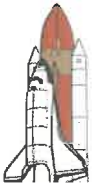
8




18



2.



12



14



14



18



10

3.



18



\_\_\_\_\_



14



\_\_\_\_\_



10

4.



\_\_\_\_\_



18



20



\_\_\_\_\_



24

5.



10



\_\_\_\_\_



6




4

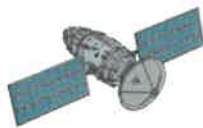


\_\_\_\_\_


6.




8




\_\_\_\_\_



\_\_\_\_\_



\_\_\_\_\_



16

Purple penguins.

# Counting in 2s Activity

Complete the following sequences:

a) 2 4 6 \_\_\_\_\_ 10 \_\_\_\_\_

b) 24 22 \_\_\_\_\_ 18 \_\_\_\_\_ 14

c) \_\_\_\_\_ 26 28 30 \_\_\_\_\_ 34

d) 46 \_\_\_\_\_ \_\_\_\_\_ 40 38 36

e) 28 \_\_\_\_\_ 32 34 \_\_\_\_\_ 38

f) \_\_\_\_\_ 44 42 \_\_\_\_\_ 38 36

g) 12 14 \_\_\_\_\_ 18 \_\_\_\_\_ 22

h) 20 \_\_\_\_\_ \_\_\_\_\_ 14 12 10

i) \_\_\_\_\_ \_\_\_\_\_ 56 58 60 62

j) 74 72 \_\_\_\_\_ \_\_\_\_\_ 66 64

Complete the number square below:

1		3		5		7		9	
11		13		15		17		19	
21		23		25		27		29	
31		33		35		37		39	
41		43		45		47		49	
51		53		55		57		59	

## Challenge

How far can you count in 2s?  
What happens when you get past 100?